

THANK YOU

Thank you for downloading this product! I hope you find it useful and fun and I hope it saves you a ton of time.

This printable is not to be shared - even if you got it for free. This is your personal copy. The pictures used in this printable were from Google Images. They are copyrighted by the original owner.

Please follow me via social media as well so you can find other activities and resources to use with your kids.



[Loveshak](#)



[Shopee Shop](#)



[Blog](#)

AMONG US Additions

Add and write the sum on the line.

$$\begin{array}{ccccccc} \text{Yellow with hat} & \text{Yellow with hat} & \text{Yellow with hat} & \text{Yellow with hat} & + & \text{Yellow with hat} & \text{Yellow with hat} & = & \underline{\hspace{2cm}} \end{array}$$

$$\begin{array}{ccccccc} \text{Blue} & \text{Blue} & \text{Blue} & + & \text{Blue} & \text{Blue} & \text{Blue} & \text{Blue} & = & \underline{\hspace{2cm}} \end{array}$$

$$\begin{array}{ccccc} \text{Grey} & + & \text{Grey} & \text{Grey} & = & \underline{\hspace{2cm}} \end{array}$$


$$\begin{array}{ccccccc} \text{Yellow} & \text{Yellow} & \text{Yellow} & \text{Yellow} & \text{Yellow} & + & \text{Yellow} & = & \underline{\hspace{2cm}} \end{array}$$

$$\begin{array}{ccccccc} \text{Cyan} & \text{Cyan} & + & \text{Cyan} & \text{Cyan} & \text{Cyan} & = & \underline{\hspace{2cm}} \end{array}$$

$$\begin{array}{ccccc} \text{Purple} & \text{Purple} & + & \text{Purple} & \text{Purple} & = & \underline{\hspace{2cm}} \end{array}$$

AMONG US Additions


Add and write the sum on the line.




5 red crewmates + 2 red crewmates = _____




2 pink crewmates with halos + 2 pink crewmates with halos = _____



4 green crewmates + 4 green crewmates = _____



4 yellow crewmates + 1 yellow crewmate = _____




2 pink crewmates with crowns + 2 pink crewmates with crowns = _____



1 grey crewmate + 3 grey crewmates = _____

Count the total number of images in each box and write your answers.



$$3 + 2 = \underline{\hspace{2cm}}$$



$$1 + 1 = \underline{\hspace{2cm}}$$



$$2 + 2 = \underline{\hspace{2cm}}$$



$$1 + 2 = \underline{\hspace{2cm}}$$




$$1 + 0 = \underline{\hspace{2cm}}$$




$$3 + 1 = \underline{\hspace{2cm}}$$




Count the total number of images in each box and write your answers.




$$5 + 1 = \underline{\hspace{2cm}}$$




$$4 + 2 = \underline{\hspace{2cm}}$$




$$3 + 4 = \underline{\hspace{2cm}}$$



$$5 + 3 = \underline{\hspace{2cm}}$$



$$2 + 3 = \underline{\hspace{2cm}}$$



$$4 + 1 = \underline{\hspace{2cm}}$$

