

# THANK YOU

**Thank you for downloading this product! I hope you find it useful and fun and I hope it saves you a ton of time.**

**This printable is not to be shared - even if you got it for free. This is your personal copy. The pictures used in this printable were from Google Images. They are copyrighted by the original owner.**

**Please follow me via social media as well so you can find other activities and resources to use with your kids.**



**[Loveshak](#)**



**[Shopee Shop](#)**



**[Blog](#)**

# Let's do Subtraction with Hana!

Count the pictures. Then cross out the number of pictures that you need to take away. How many do you have left?



$$5 - 2 = 3$$



$$7 - 3 =$$



$$8 - 6 =$$



$$4 - 1 =$$




$$3 - 2 =$$



$$5 - 1 =$$

# Let's do Subtraction with Hana!


Count the pictures. Then cross out the number of pictures that you need to take away. How many do you have left?



$$5 - 1 = 4$$



$$6 - 5 =$$



$$4 - 2 =$$



$$7 - 3 =$$



$$9 - 6 =$$



$$3 - 1 =$$

# Let's do Subtraction with Hana!

Count the pictures. Then cross out the number of pictures that you need to take away. How many do you have left?




$$4 - 2 = 2$$



$$7 - 4 =$$



$$6 - 3 =$$



$$8 - 2 =$$



$$5 - 4 =$$



$$4 - 1 =$$

# Let's do Subtraction with Hana!

Count the pictures. Then cross out the number of pictures that you need to take away. How many do you have left?




$$5 - 4 = 1$$



$$3 - 2 =$$



$$5 - 1 =$$



$$3 - 3 =$$



$$5 - 3 =$$



$$4 - 1 =$$

# Let's do Subtraction with Hana!

Count the pictures. Then cross out the number of pictures that you need to take away. How many do you have left?



$$2 - 2 = 0$$



$$6 - 4 =$$



$$4 - 2 =$$



$$5 - 3 =$$



$$3 - 1 =$$




$$6 - 1 =$$

# Let's do Subtraction with Hana!

Count the pictures. Then cross out the number of pictures that you need to take away. How many do you have left?




$$3 - 2 = 1$$




$$6 - 4 =$$




$$8 - 5 =$$



$$4 - 3 =$$



$$5 - 5 =$$



$$6 - 2 =$$

# Let's do Subtraction with Hana!

Count the pictures. Then cross out the number of pictures that you need to take away. How many do you have left?



$$7 - 2 = 5$$



$$4 - 3 =$$



$$6 - 3 =$$



$$9 - 2 =$$



$$8 - 2 =$$



$$6 - 1 =$$



# Let's do Subtraction with Hana!

Count the pictures. Then cross out the number of pictures that you need to take away. How many do you have left?



$$6 - 6 = 0$$



$$5 - 1 =$$



$$5 - 5 =$$



$$7 - 1 =$$




$$8 - 1 =$$




$$6 - 5 =$$

# Let's do Subtraction with Hana!

Count the pictures. Then cross out the number of pictures that you need to take away. How many do you have left?



$$8 - 4 = 4$$



$$10 - 1 =$$



$$1 - 1 =$$



$$7 - 4 =$$



$$8 - 7 =$$



$$10 - 5 =$$