

Let's do Subtraction with Hana!

Count the pictures. Then cross out the number of pictures that you need to take away. How many do you have left?



$$5 - 2 = 3$$



$$7 - 3 =$$



$$8 - 6 =$$



$$4 - 1 =$$




$$3 - 2 =$$



$$5 - 1 =$$

Let's do Subtraction with Hana!


Count the pictures. Then cross out the number of pictures that you need to take away. How many do you have left?



$$5 - 1 = 4$$



$$6 - 5 =$$



$$4 - 2 =$$



$$7 - 3 =$$



$$9 - 6 =$$



$$3 - 1 =$$

Let's do Subtraction with Hana!

Count the pictures. Then cross out the number of pictures that you need to take away. How many do you have left?




$$4 - 2 = 2$$



$$7 - 4 =$$



$$6 - 3 =$$



$$8 - 2 =$$



$$5 - 4 =$$



$$4 - 1 =$$

Let's do Subtraction with Hana!

Count the pictures. Then cross out the number of pictures that you need to take away. How many do you have left?



$$5 - 4 = 1$$



$$3 - 2 =$$



$$5 - 1 =$$



$$3 - 3 =$$



$$5 - 3 =$$



$$4 - 1 =$$

Let's do Subtraction with Hana!

Count the pictures. Then cross out the number of pictures that you need to take away. How many do you have left?



$$2 - 2 = 0$$



$$6 - 4 =$$



$$4 - 2 =$$



$$5 - 3 =$$



$$3 - 1 =$$




$$6 - 1 =$$

Let's do Subtraction with Hana!

Count the pictures. Then cross out the number of pictures that you need to take away. How many do you have left?




$$3 - 2 = 1$$




$$6 - 4 =$$



$$8 - 5 =$$



$$4 - 3 =$$



$$5 - 5 =$$



$$6 - 2 =$$

Let's do Subtraction with Hana!

Count the pictures. Then cross out the number of pictures that you need to take away. How many do you have left?



$$7 - 2 = 5$$



$$4 - 3 =$$



$$6 - 3 =$$



$$9 - 2 =$$



$$8 - 2 =$$



$$6 - 1 =$$

Let's do Subtraction with Hana!

Count the pictures. Then cross out the number of pictures that you need to take away. How many do you have left?



$$6 - 6 = 0$$



$$5 - 1 =$$



$$5 - 5 =$$



$$7 - 1 =$$



$$8 - 1 =$$



$$6 - 5 =$$

Let's do Subtraction with Hana!

Count the pictures. Then cross out the number of pictures that you need to take away. How many do you have left?



$$8 - 4 = 4$$



$$10 - 1 =$$



$$1 - 1 =$$



$$7 - 4 =$$



$$8 - 7 =$$



$$10 - 5 =$$